

Name \_\_\_\_\_

Show your work.



1. 4 is just after \_\_\_\_.

2. Which is the missing number?

6, 7, ?, 9, 10

3. Which is one way to show 11?

4. Add.

$$\begin{array}{r} 3 \\ 3 \\ + 5 \\ \hline \end{array}$$

5. 11 is just before \_\_\_\_.

6. What number comes between 8 and 10?

7. Choose the related fact for  $7 + 4 = 11$ .

- |                       |                       |
|-----------------------|-----------------------|
| $5 + 7 = 12$          | $8 + 3 = 11$          |
| <input type="radio"/> | <input type="radio"/> |
| $4 + 7 = 11$          | $5 + 6 = 11$          |
| <input type="radio"/> | <input type="radio"/> |

8. Which number sentence matches the picture?



- |                       |                       |
|-----------------------|-----------------------|
| $4 + 3 = 7$           | $5 + 2 = 7$           |
| <input type="radio"/> | <input type="radio"/> |
| $0 + 4 = 4$           | $7 + 2 = 9$           |
| <input type="radio"/> | <input type="radio"/> |

Show your work.

9. Add.

$$\begin{array}{r} 4 \\ + 8 \\ \hline \end{array}$$

10. Choose the related subtraction fact.

$$9 - 7 = 2$$

$$9 - 9 = 0 \quad 9 - 2 = 7$$

$$2 + 7 = 9 \quad 7 + 2 = 9$$

11. Choose the related addition fact.

$$8 - 5 = 3$$

$$8 - 3 = 5 \quad 8 - 0 = 8$$

$$5 + 3 = 8 \quad 3 + 5 = 8$$

12. Add.

$$7 + 3 = ?$$

13. Find the difference.

$$5 - 0 = ?$$


14. Which is the word name for 8th?

seventh

ninth

eighth

tenth



15. Which bug is circled?

16. What is the position of the last bug?

Name \_\_\_\_\_

- 17.** Which number sentence matches the number line?



$4 + 5 = 9$

$5 + 4 = 9$

$9 - 5 = 4$

$9 - 4 = 5$

- 18.** Which number sentence is shown on the number line?



$12 - 4 = 8$

$11 - 2 = 9$

$10 - 3 = 7$

$11 - 3 = 8$

## Tell About It

- 19.** Color to show two ways to make 9.  
Write a number sentence for each.

○	○	○	○	○	○	○	○	○
---	---	---	---	---	---	---	---	---

\_\_\_ ○ \_\_\_ = \_\_\_

○	○	○	○	○	○	○	○	○
---	---	---	---	---	---	---	---	---




\_\_\_ ○ \_\_\_ = \_\_\_




Copyright © by William H. Sadler, Inc. All rights reserved.




Show your work on a separate sheet of paper.



**20.** Genna picks a number between 7 and 11.  
It is one less than 10.  
What number does Genna pick?

**23.** Ty picks a number between 4 and 7.  
It is one more than 5.  
What number does Ty pick?

**21.** Simon has 4 .  
Peter has 2 more  than Simon.  
How many  does Peter have?

**24.** Lori has 7 .  
Danielle has 4 fewer  than Lori.  
How many  do they have in all?

**22.** Angela has 9 .  
Sam has 6 .  
How many more  does Angela have than Sam?

**25.** Edward has 8 .  
Five  fly away.  
How many of Edward's birds are left?

Name \_\_\_\_\_

Show your work

1. What number comes just after?

37, ?

2. Count by 2s. Choose the missing number.

74, 76, 78, ?

3. Add.

$$\begin{array}{r} 7 \\ + 6 \\ \hline \end{array}$$

4. What is the expanded form for 82?

5. Count by 5s. Choose the missing number.

35, 40, ?, 50

6. Compare.  
Choose  $<$ ,  $=$ , or  $>$ .

53  $\textcircled{?}$  35

7. Add.

$$9 + 3 = ?$$

8. Add.

$$\begin{array}{r} 28 \\ + 4 \\ \hline \end{array}$$

show your work.

9. Subtract.

$$14 - 7 = ?$$

10. Subtract.

$$\begin{array}{r} 17 \\ - 9 \\ \hline \end{array}$$

11. What is the value of the underlined digit?

39

12. Which number completes the fact family?

$$\begin{array}{l} 6 + ? = 11 \\ ? + 6 = 11 \\ 11 - 6 = ? \\ 11 - ? = 6 \end{array}$$

13. Which is the expanded form for 26?

14. What is the number?

6 tens 3 ones

15. What number comes just before?


?, 51



16. Which number completes the fact family?

$$\begin{array}{l} ? - 7 = 2 \\ 7 + 2 = ? \\ 2 + 7 = ? \\ ? - 2 = 7 \end{array}$$



Name \_\_\_\_\_

Use the graph for exercises 17 and 18.



- 17.** How many children voted for  and ? Choose the correct number sentence.

$3 + 0 = 3$	$3 + 2 = 5$
<input type="radio"/>	<input type="radio"/>
$2 + 5 = 7$	$3 + 5 = 8$
<input type="radio"/>	<input type="radio"/>

- 18.** How many more chose  than  as their favorite toy?

- 19.** Find the missing number.

$$6 + ? = 12$$

- 20.** Compare. Choose  $<$ ,  $=$ , or  $>$ .

$$37 \text{ ( ? ) } 39$$

## Tell About It

- 21.** Look at the number pattern. Explain the rule.

15, 20, 25, 30, 35, 40



Show your work on a separate sheet of paper.

**22.** Joanna's house number is an odd number. It is less than 97. It is greater than 94. What is Joanna's house number?

**25.** Sam has 5 packs of baseball cards. Each pack has 10 cards. How many baseball cards does Sam have?

**23.** Cyd reads 10 books on vacation. Her sister reads 10 books. How many books do the girls read in all?

**26.** Jeff plays soccer with 16 friends. Eight children leave the soccer field. How many children are left on the soccer field?

**24.** Timothy finds 6 starfish. Each starfish has 5 arms. How many arms are there in all?

**27.** Laura brings 4 plates of cookies to class. Each plate has 10 cookies on it. How many cookies does Laura bring to class?